

Using number skills

Say

starting from...



0 1 2 3 4 5 6 7 8 9 10 11 12



13 14 15 16 17 18 19 20

Read, write and count

0 1 2 3 4 5 6 7 8 9 10





one two three

count in 2s 2 4 6 8 10

count in 10s

10 20 30 40 50 60 70 80 90 100





Using number skills



sensible estimate



There are about 10 marbles. Let's count them to check.

Compare and order

0 1 2 3 4 5 6 7 8 9 10

5 comes after
4

4 is bigger than
2


6 is smaller
than 10


Use

one more...

one less...


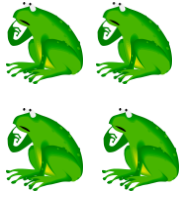
1 2 3 4 5 6 7 8 9 10





Using number skills

Understand

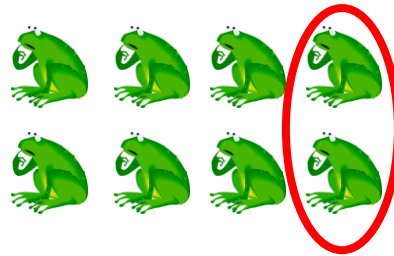


How many altogether?

add

How many are left?

take away



counting zero = none

number bond

number fact

$$0 + 5 = 5$$

$$1 + 4 = 5$$

$$2 + 3 = 5$$

$$3 - 2 = 5$$

$$4 + 1 = 5$$

$$5 - 0 = 5$$

money sell spend pay


coin penny pence


1p

2p

5p

10p






Using number skills




Recite

One, two, three, four, five,
Once I caught a fish alive,
Six, seven, eight, nine, ten,
Then I let it go again.
Why did you let it go?
Because it bit my finger so.
Which finger did it bite?
This little finger on the right.




In daily activities and play use...



We need to add
two more sticks.

If we take away
3 of the trikes, we can
fit them in the bays.



Using number skills



In daily activities and play use...

| | | | | |
|-----------------|-----------------|-----------------|-----------------|------------------|
| 1 st | 2 nd | 3 rd | 4 th | 5 th |
| first | second | third | fourth | fifth |
| 6 th | 7 th | 8 th | 9 th | 10 th |
| sixth | seventh | eighth | ninth | Tenth |

How many more hats do I need for the teddies?



I have too many cars. How many do I need to give to Class 2?

